




Statistics

The Teddy Bear Game



All of the teddy bears will be put in a bag and then pulled out one at a time. What color do you think has the best chance of being pulled out? What color has the least chance of being pulled out?

There are 15 bears what is the chance that each color will get picked?

Blue _____ to 15 picks

Orange _____ to 15 picks

Purple _____ to 15 picks